



JEE Advanced Exam 2019 (Paper & Solution)

Date : 27 / 05 / 2019

PAPER-1

PART-I (PHYSICS)

SECTION – 1 (Maximum Marks : 12)


- This section contains **FOUR (04)** questions
- Each question has **FOUR** options. **ONLY ONE** of these four options is correct answer.
- For each question, choose the correct option corresponding to the correct answer.
- Answer to each question will be evaluated according to the following marking scheme :
 - Full Marks : +3 If **ONLY** the correct option is chosen.
 - Zero Marks : 0 If none of the options is chosen (i.e. the question is unanswered).
 - Negative Marks : -1 In all other cases.

Q.1 Consider a spherical gaseous cloud of mass density $\rho(r)$ in free space where r is the radial distance from its center. The gaseous cloud is made of particles of equal mass m moving in circular orbits about the common center with the same kinetic energy K . The force acting on the particle is their mutual gravitational force. If $\rho(r)$ is constant in time, the particle number density $n(r) = \rho(r)/m$ is
[G is universal gravitational constant]

(1) $\frac{3K}{\pi r^2 m^2 G}$ (2) $\frac{K}{2\pi r^2 m^2 G}$ (3) $\frac{K}{\pi r^2 m^2 G}$ (4) $\frac{K}{6\pi r^2 m^2 G}$

Ans.[2]

Sol. Let the mass of cloud = M
Consider a particle at distance r from c.o.m.



$$\Rightarrow \frac{GMm}{r^2} = \frac{mv^2}{r} \quad \dots\dots(1)$$

Given that $\frac{1}{2}mv^2 = K$

$$v^2 = \frac{2K}{m}$$

Put the value in equ.(1)



$$\frac{GM}{r} = v^2 = \frac{2K}{m}$$

$$M = \frac{2Kr}{Gm}$$

Differentiating it

$$\frac{dM}{dr} = \frac{2K}{Gm}$$

Put dM = mass of element = $(4\pi r^2 dr)\rho$

$$4\pi r^2 \rho = \frac{2K}{Gm}$$

$$\therefore \rho = \frac{2K}{Gm(4\pi r^2)} = \frac{K}{2\pi r^2 Gm}$$

$$\frac{\rho}{m} = \frac{K}{2\pi r^2 Gm^2}$$

Q.2 In a radioactive sample, ${}^{40}_{19}\text{K}$ nuclei either decay into stable ${}^{40}_{20}\text{Ca}$ nuclei with decay constant 4.5×10^{-10} per year or into stable ${}^{40}_{18}\text{Ar}$ nuclei with decay constant 0.5×10^{-10} per year. Given that in this sample all the stable ${}^{40}_{20}\text{Ca}$ and ${}^{40}_{18}\text{Ar}$ nuclei are produced by the ${}^{40}_{19}\text{K}$ nuclei only. In time $t \times 10^9$ years, if the ratio of the sum of stable ${}^{40}_{20}\text{Ca}$ and ${}^{40}_{18}\text{Ar}$ nuclei to the radioactive ${}^{40}_{19}\text{K}$ nuclei is 99, the value of t will be- [Given $\ln 10 = 2.3$]

(1) 2.3

(2) 9.2

(3) 1.15

(4) 4.6

Ans.[2]

Sol. $\lambda = \lambda_1 + \lambda_2 = 4.5 \times 10^{-10} + 0.5 \times 10^{-10}$

$\lambda = 5.0 \times 10^{-10}$ per year

$$N = N_0 e^{-\lambda t} \quad \dots\dots(1)$$

In time t 99% K decayed

Undecayed

$$N = N_0 - \frac{99N_0}{100} = \frac{N_0}{100}$$

Put the value in equation (1)

$$\frac{N_0}{100} = N_0 e^{-\lambda t}$$

$$t = \frac{(2.303) \times 2}{\lambda}$$

$$\therefore t = \frac{4.6}{\lambda} = \frac{4.6}{5} \times 10^{10} \text{ years}$$

$$\frac{4.6 \times 10^{10}}{5} = t \times 10^9$$

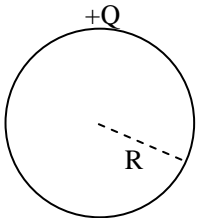
$$t = \frac{4.6 \times 10^{10}}{5 \times 10^9} = \frac{46}{5} = 9.2$$

Q.3 A thin spherical insulating shell of radius R carries a uniformly distributed charge such that the potential at its surface is V_0 . A hole with a small area $\alpha 4\pi R^2$ ($\alpha \ll 1$) is made on the shell without affecting the rest of the shell. Which one of the following statements is correct ?

- (1) The magnitude of electric field at the center of the shell is reduced by $\frac{\alpha V_0}{2R}$
- (2) The ratio of the potential at the center of the shell to that of the point at $\frac{1}{2}R$ from center towards the hole will be $\frac{1-\alpha}{1-2\alpha}$
- (3) The magnitude of electric field at a point, located on a line passing through the hole and shell's center, on a distance $2R$ from the center of the spherical shell will be reduced by $\frac{\alpha V_0}{2R}$
- (4) The potential at the center of the shell is reduced by $2\alpha V_0$

Ans.[2]

Sol. Potential at surface = $V_0 = \frac{KQ}{R}$



Small element of area 'da' is removed charge on element $dq = \sigma da$

$$dq = \frac{Q}{4\pi R^2} da$$

$$= \frac{Q}{4\pi R^2} (4\pi R^2 \alpha)$$

$$dq = \alpha Q$$

Potential at center now

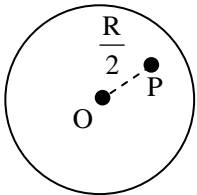
$$V' = \frac{kQ}{R} - \frac{k(dq)}{R} = V_0(1 - \alpha)$$

$$\text{Initially } V = V_0 = \frac{kQ}{R}$$

$$\text{Decrease in potential} = V_0 - V_0(1 - \alpha)$$

$$= V_0\alpha$$

Potential at distance $\frac{R}{2}$ from center



$$V_P = \frac{KQ}{R} - \frac{2Kdq}{R} = \frac{KQ}{R}(1 - 2\alpha) = V_0(1 - 2\alpha)$$

$$\text{Therefore } \frac{V_C}{V_P} = \frac{1 - \alpha}{1 - 2\alpha}$$



Q.4 A current carrying wire heats a metal rod. The wire provides a constant power (P) to the rod. The metal rod is enclosed in an insulated container. It is observed that the temperature (T) in the metal rod changes with time (t) as $T(t) = T_0(1 + \beta t^{1/4})$, where β is a constant with appropriate dimension while T_0 is a constant with dimension of temperature. The heat capacity of the metal is-

(1) $\frac{4P(T(t) - T_0)^3}{\beta^4 T_0^4}$ (2) $\frac{4P(T(t) - T_0)}{\beta^4 T_0^2}$ (3) $\frac{4P(T(t) - T_0)^4}{\beta^4 T_0^5}$ (4) $\frac{4P(T(t) - T_0)^2}{\beta^4 T_0^3}$

Ans.[1]**Sol.** Heat $Q = ms \, dT$

$$\therefore \text{Power } P = \frac{dQ}{dt} = \frac{msdT}{dt}$$

$$\therefore P = ms \frac{dT}{dt} \quad \dots (1)$$

$$T = T_0(1 + \beta t^{1/4})$$

$$\frac{dT}{dt} = \frac{\beta T_0}{4} t^{-3/4} \text{ put the value in (1)}$$

$$\therefore P = ms \left(\frac{\beta T_0}{4} t^{-3/4} \right)$$

$$\text{Heat capacity} = ms = \frac{4P}{\beta T_0 t^{-3/4}} = \frac{4P}{\beta T_0} t^{3/4} \quad \dots (2)$$

$$t^{1/4} = \frac{T - T_0}{T_0 \beta}$$

$$\therefore t^{3/4} = \frac{(T - T_0)^3}{T_0^3 \beta^3} \text{ put the value in (2)}$$

$$\text{Heat capacity} = \frac{4P}{\beta T_0} \frac{[T - T_0]^3}{T_0^3 \beta^3} = \frac{4P(T - T_0)^3}{\beta^4 T_0^4}$$

SECTION – 2 (Maximum Marks : 32)

- This section contains **EIGHT (08)** questions
- Each question has **FOUR** options. **ONE OR MORE THAN ONE** of these four option(s) is (are) correct option(s).
- For each question, choose(s) corresponding to (all) the correct answer(s).
- Answer to each question will be evaluated according to the following marking scheme :

| | | |
|----------------|------|--|
| Full Marks | : +4 | If only (all) the correct option(s) is (are) chosen. |
| Partial Marks | : +3 | If all the four options are correct but ONLY three options are chosen. |
| Partial Marks | : +2 | If three or more options are correct but ONLY two options are chosen, both of which are correct options. |
| Partial Marks | : +1 | If two or more options are correct but ONLY one option is chosen and it is a correct option. |
| Zero Marks | : 0 | If none of the option is chosen (i.e. the question is unanswered). |
| Negative Marks | : -1 | In all other cases. |

Q.1 A charged shell of a radius R carries a total charge Q . Given ϕ as the flux of electric field through a closed cylindrical surface of height h , radius r and with its center same as that of the shell. Here, center of the cylinder is a point on the axis of the cylinder which is equidistant from its top and bottom surfaces. Which of the following option(s) is/are correct? [ϵ_0 is the permittivity of free space]

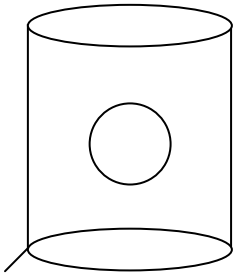
- (1) If $h > 2R$ and $r > R$ then $\phi = Q/\epsilon_0$ (2) If $h < 8R/5$ and $r = 3R/5$ then $\phi = 0$
 (3) If $h > 2R$ and $r = 3R/5$ then $\phi = Q/5\epsilon_0$ (4) If $h > 2R$ and $r = 4R/5$ then $\phi = Q/5\epsilon_0$

Ans.[1,2,3]

Sol. (1) $h > 2R$, $r > R$

$$q_{\text{en}} = Q$$

$$\phi = \frac{Q}{\epsilon_0}$$

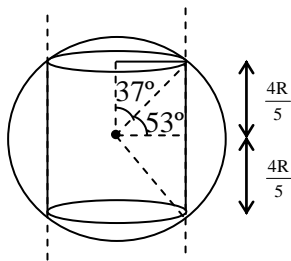


(2) $h < \frac{8R}{5}$, $r = \frac{3R}{5}$

$$h < 1.6 R$$

$$2r = \frac{6}{5}R = 1.2 R$$

$$\phi = 0$$



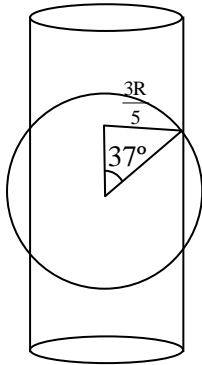
(3) $h > 2R$

$$= 2\pi \left(1 - \frac{4}{5}\right)$$

$$= 2\pi \left(\frac{1}{5}\right) = \frac{2\pi}{5}$$

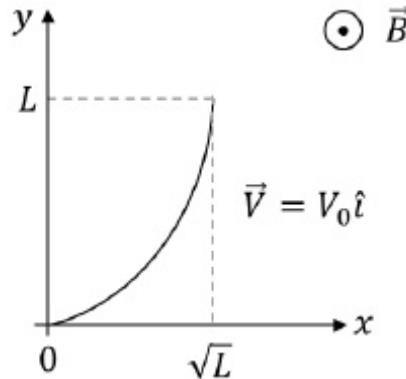
$$q_{\text{en}} = 2 \left[\frac{Q}{4\pi} \times \frac{2\pi}{5} \right]$$

$$= \frac{Q}{5} \Rightarrow \phi = \frac{Q}{5\epsilon_0}$$



option (1), (2), (3)

- Q.2** A conducting wire of parabolic shape, initially $y = x^2$, is moving with velocity $\vec{V} = V_0 \hat{i}$ in a non-uniform magnetic field $\vec{B} = B_0 \left(1 + \left(\frac{y}{L}\right)^\beta\right) \hat{k}$, as shown in figure. If V_0 , B_0 , L and β are positive constants and $\Delta\phi$ is the potential difference developed between the ends of the wire, then the correct statement(s) is/are



- (1) $|\Delta\phi| = \frac{1}{2} B_0 V_0 L$ for $\beta = 0$
- (2) $|\Delta\phi|$ is proportional to the length of the wire projected on the y-axis
- (3) $|\Delta\phi| = \frac{4}{3} B_0 V_0 L$ for $\beta = 2$
- (4) $|\Delta\phi|$ remains the same if the parabolic wire is replaced by a straight wire, $y = x$ initially, of length $\sqrt{2} L$

Ans.[2,3,4]

Sol. Magnetic field is uniform, therefore emf can be calculated for straight wire of length L

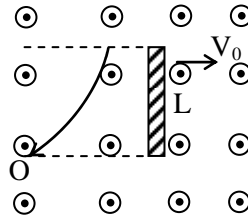
$$e = \int_0^L B V_0 dy$$

$$e = B_0 V_0 \int \left(1 + \left(\frac{y}{L}\right)^\beta\right) dy$$

$$= B_0 V_0 \left[y + \frac{1}{L^\beta} \frac{(y)^{\beta+1}}{\beta+1} \right]_0^L$$

$$= B_0 V_0 \left[L + \frac{L^{\beta+1}}{(\beta+1)L^\beta} \right]$$

$$= B_0 V_0 L \left[1 + \frac{1}{\beta+1} \right]$$



∴ If $\beta = 0$, $e = B_0 V_0 L [2] = 2B_0 V_0 L$

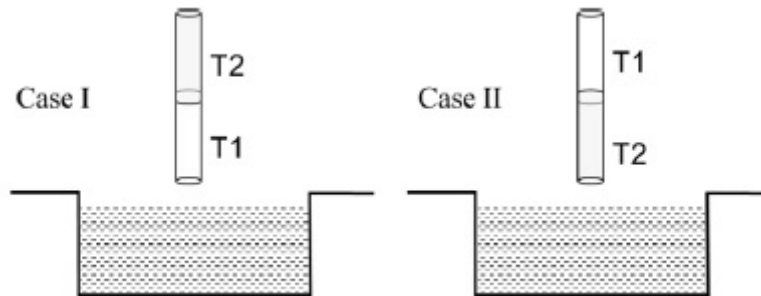
$e \propto L$ [2] is correct

If $\beta = 2$, $e = B_0 V_0 L \left[1 + \frac{1}{3} \right] = \frac{4}{3} B_0 V_0 L$ [3] is correct

If $x = y$, still length of projection is L

∴ e same 4 is correct

Q.3 A cylindrical capillary tube of 0.2 mm radius is made by joining two capillaries T1 and T2 of different materials having water contact angles of 0° and 60° , respectively. The capillary tube is dipped vertically in water in two different configurations, case I and II as shown in figure. Which of the following option(s) is(are) correct ? [Surface tension of water = 0.075 N/m, density of water = 1000 kg/m^3 , take $g = 10 \text{ m/s}^2$]



- (1) For case I, if the capillary joint is 5 cm above the water surface, the height of water column raised in the tube will be more than 8.75 cm. (Neglect the weight of the water in the meniscus)
- (2) For case I, if the joint is kept at 8 cm above the water surface, the height of water column in the tube will be 7.5 cm. (Neglect the weight of the water in the meniscus)
- (3) For case II, if the capillary joint is 5 cm above the water surface, the height of water column raised in the tube will be 3.75 cm. (Neglect the weight of the water in the meniscus)
- (4) The correction in the height of water column raised in the tube, due to weight of water contained in the meniscus, will be different for both cases



Ans.[2,3,4]

Sol. Case I

$$\frac{2T_1}{r} = \rho gh$$

$$h = \frac{2 \cdot (0.075)}{\rho gr}$$

$$= \frac{2 \cdot (0.075)}{10^3 \times 10 \times 0.2 \times 10^{-3}}$$

$$= 0.075 \text{ m}$$

$$= 7.5 \text{ cm}$$

But capillary joint is at 5 cm from water surface.

⇒ T₁ section of the capillary is completely filled.

Now 2.5 cm of the liquid in T₁ will take half the length in T₂

$$\Rightarrow \text{total length} = 5 \text{ cm} + \frac{2.5}{2} = 6.25 \text{ cm}$$

Case II

$$\rho gh = \frac{2T}{r} \cos\theta$$

$$\Rightarrow h = 3.75 \text{ cm}$$

In option (4)

End correction will be different.

So option (2), (3) and (4) are correct.

Q.4 Let us consider a system of units in which mass and angular momentum are dimensionless. If length has dimension of L, which of the following statement(s) is/are correct ?

- (1) The dimension of power is L⁻⁵
- (2) The dimension of linear momentum is L⁻¹
- (3) The dimension of energy is L⁻²
- (4) The dimension of force is L⁻³

Ans.[2,3,4]

Sol. $m \rightarrow 0, v = \frac{1}{L} = L^{-1}$

$$mvr \rightarrow 0 \qquad M \rightarrow 0$$

$$L \rightarrow L \qquad L \rightarrow L'$$

$$\frac{L}{T} \rightarrow L'$$

$$T = L^2$$

option(1)

$$\text{Power } P = M^1 L^2 T^{-3}$$

$$= M^0 L^2 (L^2)^{-3} = L^{-4}$$

incorrect

option(2)

$$\text{Momentum} = mv = M^0L^{-1} \quad \text{correct}$$

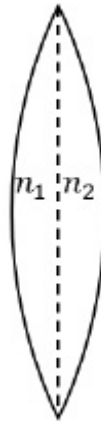
option(3)

$$\begin{aligned} \text{Energy} &= M^1L^2T^{-2} \\ &= M^0L^2L^{-4} \rightarrow L^{-2} \quad \text{correct} \end{aligned}$$

option (4)

$$\begin{aligned} F &= M^1L^1T^{-2} \\ &= M^0L^1L^{-4} = L^{-3} \quad \text{correct} \end{aligned}$$

- Q.5** A thin convex lens is made of two materials with refractive indices n_1 and n_2 , as shown in the figure. The radius of curvature of the left and right spherical surfaces are equal. f is the focal length of the lens when $n_1 = n_2 = n$. The focal length is $f + \Delta f$ when $n_1 = n$ and $n_2 = n + \Delta n$. Assuming $\Delta n \ll (n - 1)$ and $1 < n < 2$, the correct statement(s) is/are



- (1) If $\frac{\Delta n}{n} < 0$ then $\frac{\Delta f}{f} > 0$
- (2) For $n = 1.5$, $\Delta n = 10^{-3}$ and $f = 20$ cm, the value of $|\Delta f|$ will be 0.02 cm (round off to 2nd decimal place)
- (3) The relation between $\frac{\Delta f}{f}$ and $\frac{\Delta n}{n}$ remains unchanged if both the convex surfaces are replaced by concave surfaces of the same radius of curvature
- (4) $\left| \frac{\Delta f}{f} \right| < \left| \frac{\Delta n}{n} \right|$

Ans.[1,2,3]

Sol. $\frac{1}{f} = (n - 1) \left(\frac{1}{R} \right)$, $\frac{1}{f_0} = \frac{1}{f} + \frac{1}{f} = \frac{2}{f}$

$$\frac{1}{f_2} = (n + \Delta n - 1) \frac{1}{R}$$

$$\frac{1}{f + \Delta f} = \frac{(n - 1)}{R} + (n + \Delta n - 1) \frac{1}{R}$$

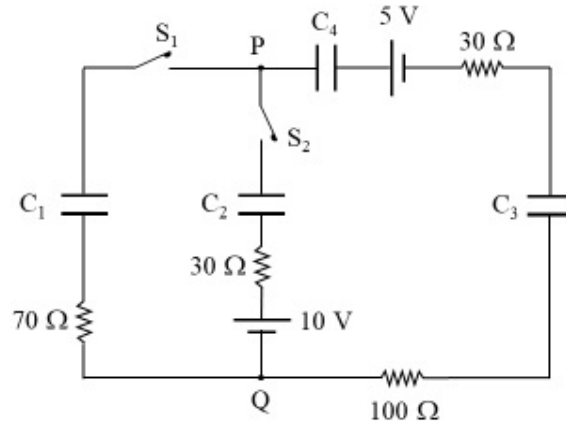
$$\frac{1}{f + \Delta f} = \frac{2n + \Delta n - 2}{R}$$

$$\frac{f_0 + \Delta f_0}{f_0} = \frac{\frac{2(n-1)}{R}}{\frac{2n + \Delta n - 2}{R}} \Rightarrow 1 + \frac{\Delta f_0}{f_0} = \frac{2(n-1)}{2n + \Delta n - 2}$$

$$\frac{\Delta f_0}{f_0} = \frac{-\Delta n}{2n + \Delta n - 2} \Rightarrow \Delta f_0 = (20) \left[\frac{10^{-3}}{3 + 10^{-3} - 2} \right] = 0.02 \text{ cm}$$

Option (1), (2), (3)

Q.6 In the circuit shown, initially there is no charge on capacitors and keys S_1 and S_2 are open. The values of the capacitors are $C_1 = 10 \mu\text{F}$, $C_2 = 30 \mu\text{F}$ and $C_3 = C_4 = 80 \mu\text{F}$.

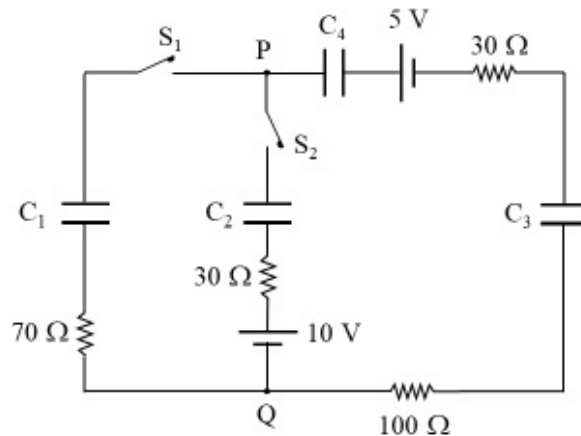


Which of the statement(s) is/are correct ?

- (1) At time $t = 0$, the key S_1 is closed, the instantaneous current in the closed circuit will be 25 mA
- (2) The key S_1 is kept closed for long time such that capacitors are fully charged. Now key S_2 is closed, at this time, the instantaneous current across 30Ω resistor (between points P and Q) will be 0.2 A (round off to 1st decimal place)
- (3) If key S_1 is kept closed for long time such that capacitors are fully charged, the voltage across the capacitor C_1 will be 4 V
- (4) If key S_1 is kept closed for long time such that capacitors are fully charged, the voltage difference between points P and Q will be 10 V

Ans.[1,3]

Sol.



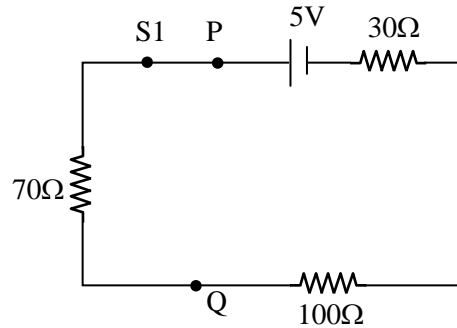
At $t = 0$, capacitors will be short circuited

$$R_{eq} = 200 \Omega$$

$$i = \frac{5}{200} = \frac{1}{40}$$

$$= 0.025 \text{ A}$$

$$= 25 \text{ mA}$$



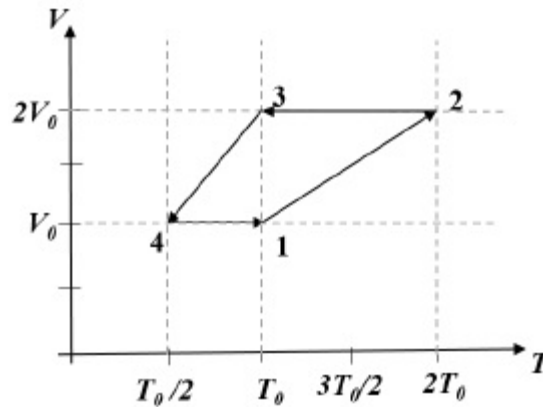
\therefore (1) is correct

After long time

$$\text{potential at } C_1 \Rightarrow V_1 = \frac{40 \times 5}{50} = 4\text{V} \quad (3) \text{ is correct}$$

So (1) and (3) are correct

Q.7 One mole of a monatomic ideal gas goes through a thermodynamic cycle, as shown in the volume versus temperature (V - T) diagram. The correct statement(s) is/are [R is the gas constant]



(1) The above thermodynamic cycle exhibits only isochoric and adiabatic processes.

(2) Work done in this thermodynamic cycle ($1 \rightarrow 2 \rightarrow 3 \rightarrow 4 \rightarrow 1$) is $|W| = \frac{1}{2} RT_0$

(3) The ratio of heat transfer during processes $1 \rightarrow 2$ and $2 \rightarrow 3$ is $\left| \frac{Q_{1 \rightarrow 2}}{Q_{2 \rightarrow 3}} \right| = \frac{5}{3}$

(4) The ratio of heat transfer during processes $1 \rightarrow 2$ and $3 \rightarrow 4$ is $\left| \frac{Q_{1 \rightarrow 2}}{Q_{2 \rightarrow 4}} \right| = \frac{1}{2}$

Ans.[2,3]

Sol. (1) Isochoric and Isobaric so option (1) is wrong

$$(2) W = W_{12} + W_{23} + W_{24} + W_{41}$$

$$= nR(2T_0 - T_0) + 0 + nR\left(\frac{T_0}{2} - T_0\right) + 0$$

$$= n \frac{RT_0}{2} = \frac{RT_0}{2} \quad \text{is correct}$$

$$(3) \frac{Q_{12}}{Q_{23}} = \frac{nC_p dT_{12}}{nC_v dT_{23}} = \frac{\frac{5R}{2}(2T_0 - T_0)}{\frac{3R}{2}(T_0 - 2T_0)} = \frac{5}{3} \text{ is correct}$$

$$(4) \frac{Q_{12}}{Q_{34}} = \frac{nC_p dT_{12}}{nC_p dT_{34}} = \frac{2T_0 - T_0}{\frac{T_0}{2} - T_0} = \frac{2}{1} \text{ is wrong}$$

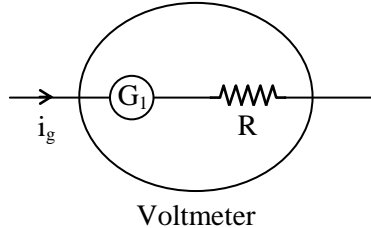
Q.8 Two identical moving coil galvanometers have 10Ω resistance and full scale deflection at $2 \mu\text{A}$ current. One of them is converted into a voltmeter of 100 mV full scale reading and the other into an Ammeter of 1 mA full scale current using appropriate resistors. These are then used to measure the voltage and current in the Ohm's law experiment with $R = 1000 \Omega$ resistor by using an ideal cell. Which of the following statement(s) is/are correct ?

- (1) The resistance of the Ammeter will be 0.02Ω (round off to 2nd decimal place)
- (2) The measured value of R will be $978 \Omega < R < 982 \Omega$
- (3) If the ideal cell is replaced by a cell having internal resistance of 5Ω then the measured value of R will be more than 1000Ω
- (4) The resistance of the Voltmeter will be $100 \text{ k}\Omega$

Ans.[1,2]

Sol. Resistance of galvanometer = 10Ω
Full deflection current $i_g = 2 \times 10^{-6} \text{ amp}$.

G_1 to voltmeter
 $V = 100 \times 10^{-3} \text{ V}$



$$V = (G_1 + R) i_g$$

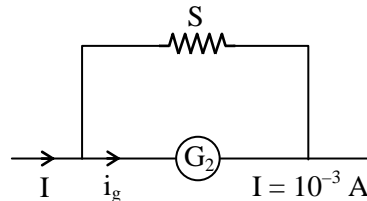
$$\begin{aligned} G_1 + R &= \frac{V}{i_g} \\ &= \frac{10^{-1}}{2 \times 10^{-6}} \\ &= \frac{10^5}{2} \\ &= 5 \times 10^4 \Omega \end{aligned}$$

$$\therefore R_V = 5 \times 10^4 \Omega$$

(4) is wrong

(1), (2) are correct

G_2 to Ammeter



$$\begin{aligned} S &= \frac{G i_g}{i - i_g} \\ &= \frac{10 \times 2 \times 10^{-6}}{10^{-3} - 2 \times 10^{-6}} \\ &= \frac{10^{-6} [20]}{10^{-6} [1000 - 2]} \\ &\approx \frac{20}{1000 - 2} \\ &\approx 0.02 \Omega \end{aligned}$$

\therefore (1) is correct

SECTION – 3 (Maximum Marks : 18)

- This section contains **SIX (06)** questions. The answer to each question is a **NUMERICAL VALUE**.
- For each question, enter the correct numerical value using the mouse and the on-screen virtual numeric keypad in the place designated to enter the answer. If the numerical value has more than two decimal places, **truncate/round-off** the value to TWO decimal places.
- Answer to each question will be evaluated according to the following marking scheme.
 Full Marks : +3 If **ONLY** the correct numerical value is entered as answer.
 Zero Marks : 0 In all other cases.

Q.1 A parallel plate capacitor of capacitance C has spacing d between two plates having area A . The region between the plates is filled with N dielectric layers, parallel to its plates, each with thickness $\delta = \frac{d}{N}$. The dielectric constant of the m^{th} layer is $K_m = K \left(1 + \frac{m}{N} \right)$. For a very large $N (> 10^3)$, the capacitance C is $\alpha \left(\frac{K \epsilon_0 A}{d \ln 2} \right)$. The value of α will be _____. [ϵ_0 is the permittivity of free space]

Sol.[1] $\left(\frac{d}{N} \right)^m = x, \quad k_m = k \left(1 + \frac{x}{d} \right)$

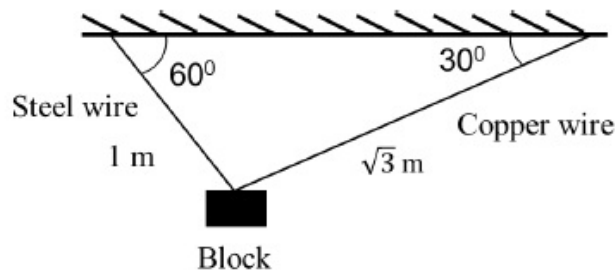
$$dC = \frac{A \epsilon_0 k_m}{dx} = \frac{A \epsilon_0 k \left(1 + \frac{x}{d} \right)}{dx}$$

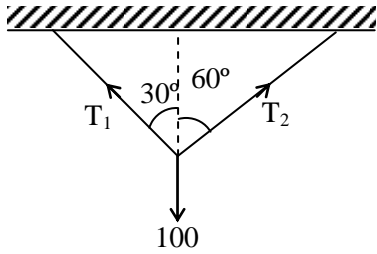
$$\frac{1}{C_{eq}} = \int_0^d \frac{dx}{A \epsilon_0 k \left(1 + \frac{x}{d} \right)} = \frac{1}{A \epsilon_0 k} \int_0^d \frac{dx}{\left(1 + \frac{x}{d} \right)}$$

$$\frac{1}{C_{eq}} = \frac{d}{A \epsilon_0 k} \ln \left(1 + \frac{x}{d} \right)_0^d \Rightarrow C_{eq} = \frac{A \epsilon_0 k}{d \ln 2}$$

$\alpha = 1$

Q.2 A block of weight 100 N is suspended by copper and steel wires of same cross sectional area 0.5 cm^2 and, length $\sqrt{3} \text{ m}$ and 1 m , respectively. Their other ends are fixed on a ceiling as shown in figure. The angles subtended by copper and steel wires with ceiling are 30° and 60° , respectively. If elongation in copper wire is (Δl_c) and elongation in steel wire is (Δl_s) , then the ratio $\frac{\Delta l_c}{\Delta l_s}$ is _____.
 [Young's modulus for copper and steel are $1 \times 10^{11} \text{ N/m}^2$ and $2 \times 10^{11} \text{ N/m}^2$, respectively]



Sol.[2]


$$\frac{T_1}{\sin 120^\circ} = \frac{T_2}{\sin 150^\circ} = \frac{100}{\sin 90^\circ}$$

$$T_1 = \frac{100\sqrt{3}}{2} = 50\sqrt{3}$$

$$T_2 = 50$$

$$y = \frac{F/A}{\Delta l/l}$$

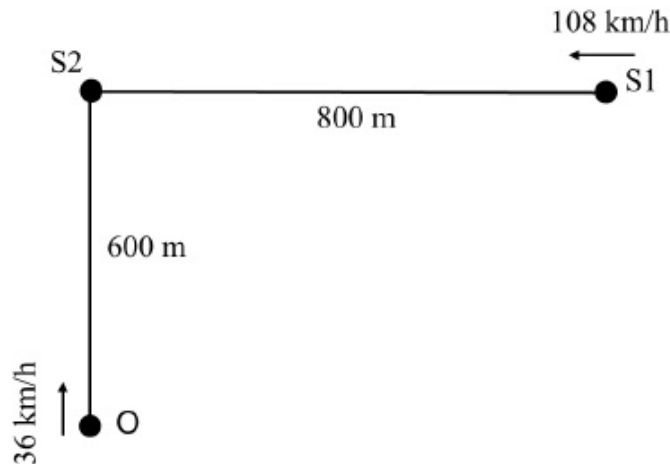
$$\Delta l = \frac{F l}{A y}$$

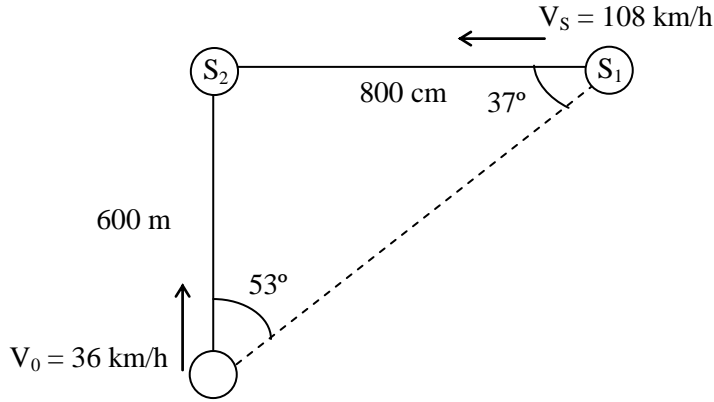
$$\Delta l_C = \frac{T_1}{0.5 \times 2 \times 10^{11}}$$

$$\frac{\Delta l_C}{\Delta l_B} = \frac{T_2 \sqrt{3} \times 2}{T_1} = \frac{50\sqrt{3} \times 2}{50\sqrt{3}} = 2$$

- Q.3** A train S1, moving with a uniform velocity of 108 km/h, approaches another train S2 standing on a platform. An observer O moves with a uniform velocity of 36 km/h towards S2, as shown in figure. Both the trains are blowing whistles of same frequency 120 Hz. When O is 600 m away from S2 and distance between S1 and S2 is 800 m, the number of beats heard by O is _____

[Speed of sound = 330 m/s]



Sol.[8.16]


$$n_1 = n \left(\frac{V + V_0 \cos 53^\circ}{V - V_s \cos 37^\circ} \right)$$

$$= \frac{120(330 + 10 \times 3/5)}{(330 - 30 \times 4/5)}$$

$$= 120 \left(\frac{336}{306} \right) = 1.098 \times 120$$

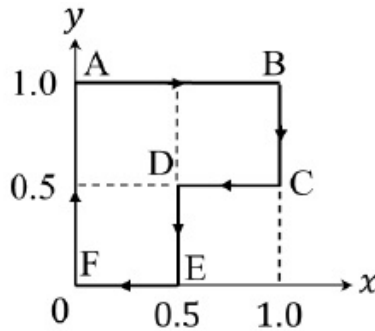
$$n_2 = n \left(\frac{V + V_0}{V} \right)$$

$$= 120 \left(\frac{330 + 10}{330} \right)$$

$$= 120 \times 1.030$$

$$\text{Beats} = 1.0908 \times 120 - 1.030 \times 120 = 8.16$$

Q.4 A particle is moved along a path AB-BC-CD-DE-EF-FA, as shown in figure, in presence of a force $\vec{F} = (\alpha y \hat{i} + 2\alpha x \hat{j}) \text{ N}$, where x and y are in meter and $\alpha = -1 \text{ Nm}^{-1}$. The work done on the particle by this force \vec{F} will be _____ Joule.



**Sol.[0.75]** A to B

$$\begin{aligned}W_1 &= \vec{F} \cdot d\vec{x} \\ &= \alpha y(dx) \\ &= (-1)(1)(1) = -1\end{aligned}$$

B to C

$$\begin{aligned}W_2 &= -(2ax) dy \\ &= -(2)(-1)(1)(0.5) \\ &= +1\end{aligned}$$

$$\begin{aligned}W_3 &= (-1)(-0.5)(0.5) \\ &= \frac{1}{4}\end{aligned}$$

$$W_4 = 2(-1)(-0.5)(0.5) = \frac{1}{2}$$

$$W_5 = \vec{F} \cdot d\vec{x} = 0$$

$$W_6 = \vec{F} \cdot d\vec{y} = 0$$

$$\text{Net work} = \frac{3}{4} = 0.75 \text{ Joule}$$

Q.5 A liquid at 30°C is poured gradually in a calorimeter which is at 110°C. Boiling temperature of liquid is 80°C. It is found that first 5 gm of liquid is fully vapourised. After that additional 80 gm quantity of liquid is adding then equilibrium temperature is reached 50°C. The ratio of latent and specific heats of liquid is _____. [Consider neglect heat transfer with surrounding.]

Sol.[270]

Case-I

$$mSdT + mL = WdT$$

$$5 \times S \times 50 + 5L = 30 W$$

Case-II

$$80 \times S \times 20 = 30 W$$

$$1600 S = 30 W$$

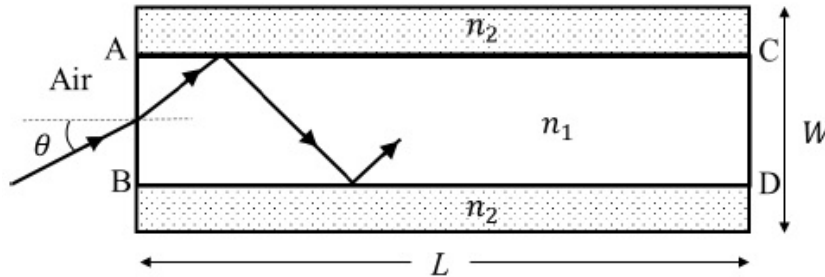
By solving

$$250 S + 5L = 1600 S$$

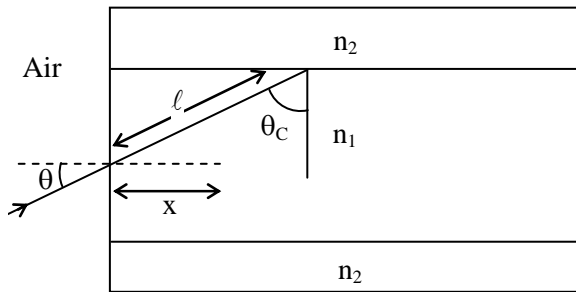
$$5L = 1350 S$$

$$\frac{L}{S} = 270$$

- Q.6** A planar structure of length L and width W is made of two different optical media of refractive indices $n_1 = 1.5$ and $n_2 = 1.44$ as shown in figure. If $L \gg W$, a ray entering from end AB will emerge from end CD only if the total internal reflection condition is met inside the structure. For $L = 9.6$ m, if the incident angle θ is varied, the maximum time taken by a ray to exit the plane CD is $t \times 10^{-9}$ s, where t is _____ [Speed of light $c = 3 \times 10^8$ m/s]



Sol.[50]



$$1.5 \sin \theta_c = 1.44 \sin 90^\circ \Rightarrow \sin \theta_c = \frac{24}{25} = \frac{x}{l} \Rightarrow l = \frac{25x}{24}$$

$$\text{Length} = \frac{25}{24} \times 9.6 \approx 10 \text{ m}$$

$$t = \frac{10}{\frac{3 \times 10^8}{1.5}} = \frac{15}{3 \times 10^8} = 5 \times 10^{-8}$$

$$t = 50 \text{ ns}$$